

CBSE Class-12 Economics

NCERT Solutions

Chapter-06 (Microeconomics) Non-Competitive Markets

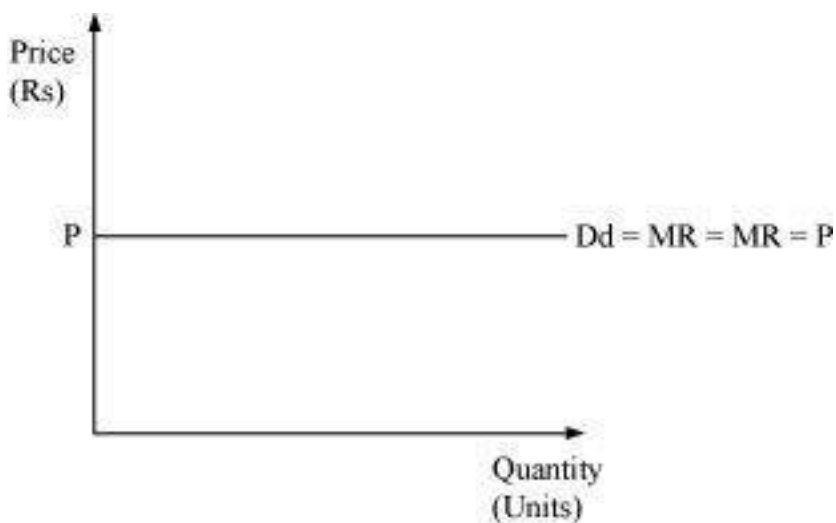
Question 1: What would be the shape of the demand curves so that the total revenue curve is

(a) a positively sloped straight line passing through the origin?

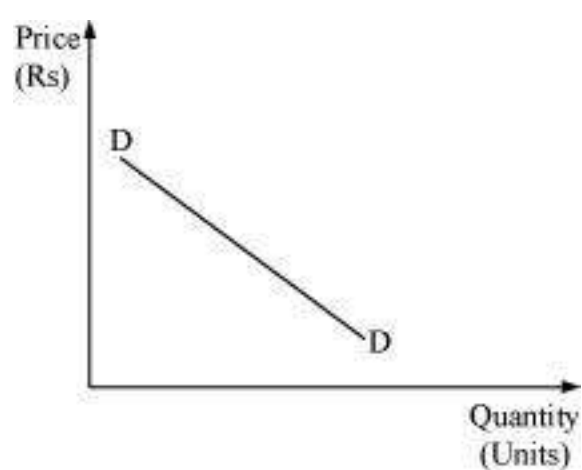
(b) a horizontal line?

Solution : The demand curve is a graphic representation of the relationship between product price and the quantity of the product demanded. It is drawn with price on the vertical axis of the graph and quantity demanded on the horizontal axis. It is a graphic representation of a market demand schedule.

(a) If the total revenue curve is a positively sloped straight line passing through the origin, then the slope of the demand curve or average revenue curve will be a horizontal line parallel to the x-axis. This happens when prices are constant at all levels of output.



(b) If the total revenue curve is a horizontal line, then the demand curve or average revenue curve will be downward sloping. Firms can increase their volume by decreasing the price i.e., AR falls with increase in sales.



Question 2: From the schedule provided below calculate the total revenue, demand curve and the price elasticity of demand:

Quantity	1	2	3	4	5	6	7	8	9
Marginal Revenue	10	6	2	2	2	0	0	0	-5

Solution :

Quantity	MR	TR	AR = TR / Q	Price elasticity of demand $Ed = \frac{\Delta Q}{\Delta P} \times \frac{P}{Q}$
1	10	10	$\frac{10}{1} = 10$	-
2	6	$10 + 6 = 16$	$\frac{16}{2} = 8$	$\frac{1}{2} \times \frac{10}{1} = 5$
3	2	$16 + 2 = 18$	$\frac{18}{3} = 6$	$\frac{1}{2} \times \frac{8}{2} = 2$
4	2	$18 + 2 = 20$	$\frac{20}{4} = 5$	$\frac{1}{1} \times \frac{6}{3} = 2$
5	2	$20 + 2 = 22$	$\frac{22}{5} = 4.4$	$\frac{1}{0.5} \times \frac{5}{4} = 2.5$
6	0	$22 + 0 = 22$	$\frac{22}{6} = 3.6$	$\frac{1}{0.9} \times \frac{4.5}{5} = 1$

7	0	$22 + 0 = 22$	$\frac{22}{7} = 3.1$	$\frac{1}{0.5} \times \frac{3.6}{6} = 1.2$
8	0	$22 + 0 = 22$	$\frac{22}{8} = 2.7$	$\frac{1}{0.4} \times \frac{3.1}{7} = 1.1$
9	-5	$22 + (-5) = 17$	$\frac{17}{9} = 1.9$	$\frac{1}{0.8} \times \frac{2.7}{9} = 0.38$

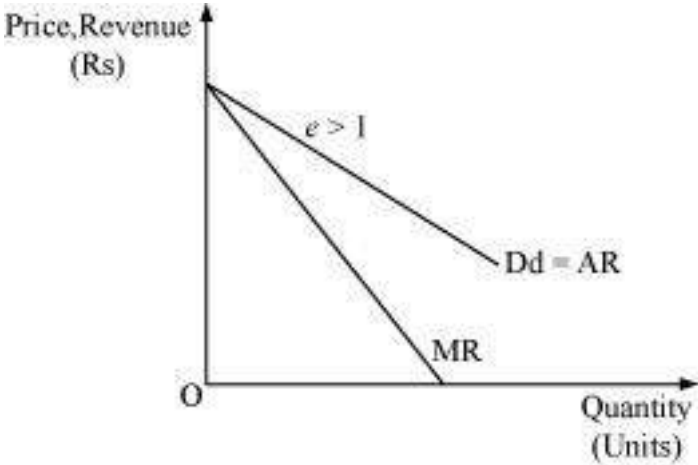
Question 3: WhatisthevalueoftheMRwhenthe demandcurveis elastic?

Solution :When demand curveis elastic($e_d > 1$), then according to the relationship $MR=$

$$P\left(1-\frac{1}{e_d}\right),\text{thefraction }\frac{1}{e_d}\text{ will be less than }1.$$

Hence,MRwillbepositivewhen $P\left(1-\frac{1}{e_d}\right)$ is positive.ARordemandcurvewillneverbe0 as TR is

alwayspositive.



The above formula is very useful when the demand function has a known constant price elasticity. Business managers must estimate the value of MR in order to arrive at decisions about price and output.

Question 4: A monopoly firm has a total fixed cost of Rs 100 and has the following demand schedule:

Quantity	1	2	3	4	5	6	7	8	9	10
----------	---	---	---	---	---	---	---	---	---	----

Marginal Revenue	100	90	80	70	60	50	40	30	20	10
------------------	-----	----	----	----	----	----	----	----	----	----

Find the short run equilibrium quantity, price and total profit. What would be the equilibrium in the long run? In case the total cost is Rs 1000, describe the equilibrium in the short run and in the long run.

Solution :

Quantity	Price (P) (Rs)	TR= (P × Q) (Rs)
1	100	100
2	9	180
3	80	240
4	70	280
5	60	300
6	50	300
7	40	280
8	30	240
9	20	180
10	10	100

As the total cost of the monopolist firm is zero, the profit will be the maximum where TR is the maximum. That is, at the 6th unit of output the firm will be maximising its profit and the short run equilibrium price will be Rs 50.

Profit of the firm = 300

Short run equilibrium price = Rs 50

Profit = TR – TC

= 300 – 0

Profit = Rs 300

If the total cost is Rs 1000, then the equilibrium will be at a point where the difference between TR and TC is the maximum.

TR is the maximum at the 6th level of output.

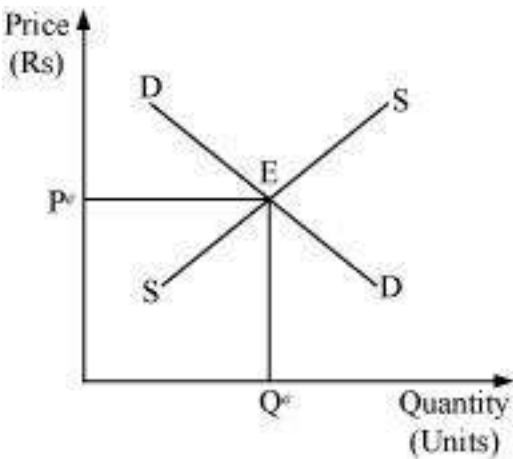
So profit = 300 – 1000 = - 700

So, the firm is earning losses and not profit. As the monopolist firm is incurring losses in the short run, it will stop its production in the long run.

Question 5: If the monopolist firm of Exercise 3, was a public sector firm. The government sets a rule for its manager to accept the government fixed price as given (i.e. to be a price taker and therefore behave as a firm in a perfectly competitive market). And the government decides to set the prices so that demand and supply in the market are equal. What would be the equilibrium price, quantity and profit in this case?

Solution : If the government sets a rule for the public sector firm to accept the fixed price, then, the monopoly firm will have to behave like a perfectly competitive firm and will be a price taker. In this case, the price fixed P^e , as set by the government, will equate the demand and the supply, which will determine the equilibrium point 'E'.

At the price P^e , the firm earns normal profit, i.e. zero economic profit.



Equilibrium price = P^e (fixed by the government) Equilibrium quantity = Q^e

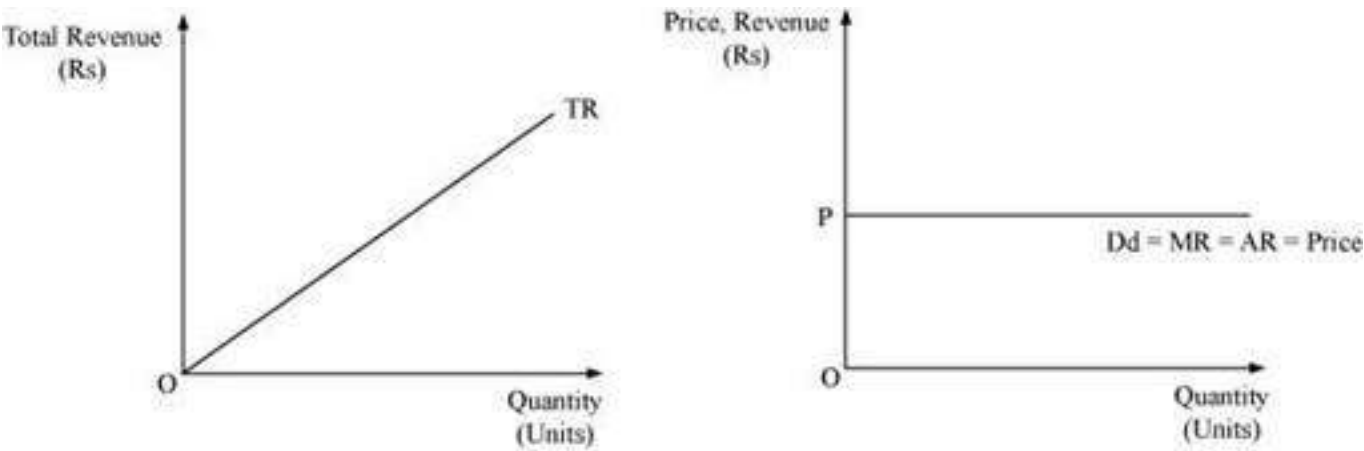
Profit = Normal profit.

In a perfectly competitive market, a firm earns zero profit. It implies that a competitive firm can get only normal profit.

Question 6: Comment on the shape of MR curve in case when TR curve is a

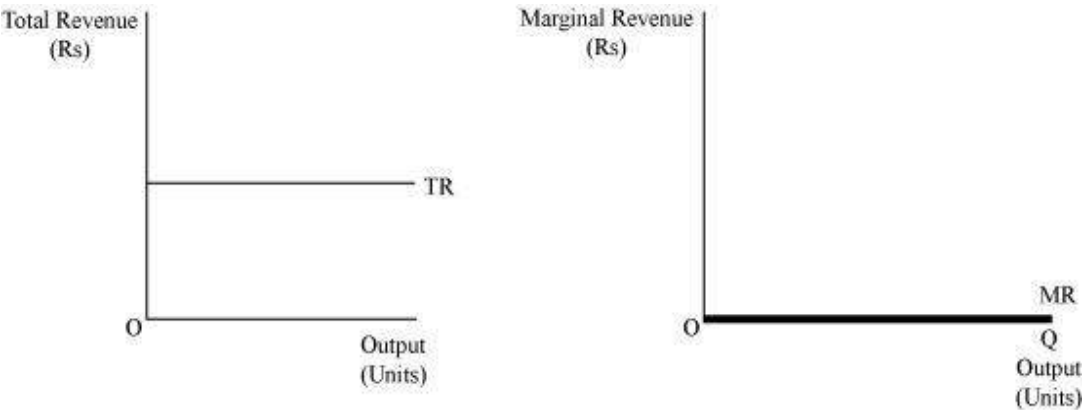
- (a) positively sloped straightline
- (b) horizontal straightline

Solution : (i) Based on the relationship between MR and TR, it can be said that when TR curve is a positively sloped straight line, then MR curve is a horizontal straight line parallel to X axis. MR and demand curve are the same, and the price (AR) remains constant for different output levels. This happens under perfect competition. MR is constant therefore, TR increases at an increasing rate. That is why TR is a positively sloped straight line.



(ii) When TR curve is a horizontal straight line, then MR is zero as it will touch X axis. Therefore, MR curve is also a horizontal straight line and coincides with the output-axis. It is because the units sold are the same at every level of output and Marginal revenue is the additional revenue generated from the sale of an additional unit of output.

$$MR = TR_n - TR_{n-1}$$



Question 7: The market demand curve for a commodity and the total cost for a monopoly firm producing the commodity is given in the schedules below.

Quantity	0	1	2	3	4	5	6	7	8
Price	52	44	37	31	26	22	19	16	13

Quantity	0	1	2	3	4	5	6	7	8
Price	10	60	90	100	102	105	109	115	125

Use the information given to calculate the following:

- (a) The MR and MC schedules
- (b) The quantities for which MR and MC are equal
- (c) The equilibrium quantity of output and the equilibrium price of the commodity
- (d) The total revenue, total cost and total profit in the equilibrium Solution : (a)

Quantity (units)	Price / AR (Rs)	TR = $P \times Q$ (Rs)	MR = $TR_n - TR_{n-1}$	TC (Rs)	MC = $TC_n - TC_{n-1}$ (Rs)
0	52	0	-	10	-
1	44	44	44	60	50
2	37	74	30	90	40
3	31	93	19	100	10
4	26	104	11	102	2
5	22	110	6	105	3
6	19	114	4	109	4

7	16	112	-2	115	6
8	13	104	-8	125	10

(b) MR equals MC at the 6th unit of output i.e., 4.

(c) At equilibrium, MR equals MC, and here MR equals MC at the 6th unit of output, where MC is upwards sloping. Thus, the equilibrium price is Rs 19.

(d) TR = Rs 114

TC = Rs 109

Total profit = TR – TC

= Rs 114 – 109 = Rs 5

Thus, Profit is equal to Rs 5.

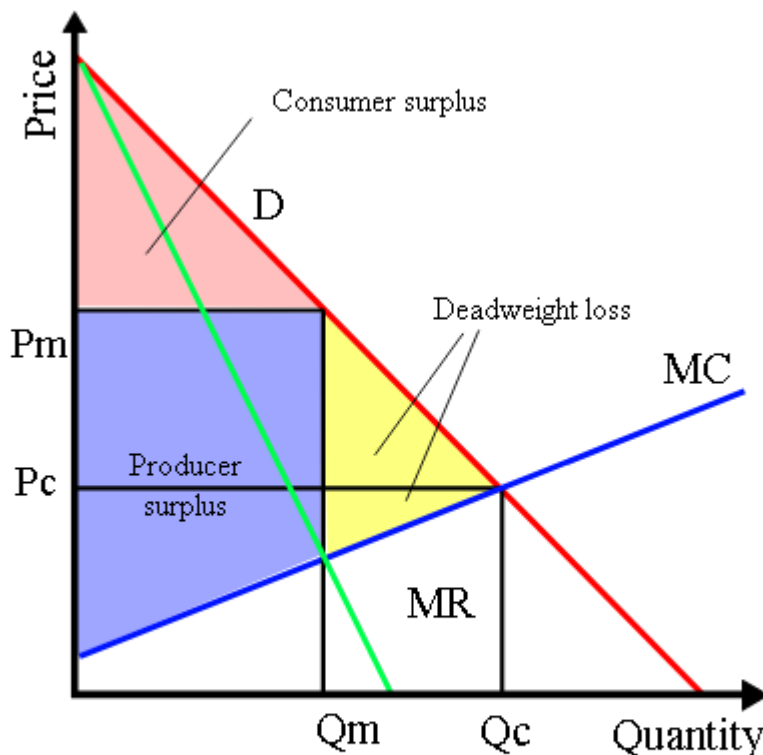
Question 8: Will the monopolist firm continue to produce in the short run if a loss is incurred at the best short run level of output?

Solution : If the monopolist firm incurs loss in the short run, then it will stop production in the long run.

A monopolist firm can earn losses in the short run if the price is less than the minimum of AC. But if the price falls below the minimum of AVC, then the monopolist will stop its operations. . The firm will continue to produce when the price is in between the minimum of AVC and the minimum of AC.

Question 9: Explain why the demand curve facing a firm under monopolistic competition is negatively sloped.

Solution : A monopolistic firm has differentiated products; thus, it has to lower its price in order to increase its sales. The products of different monopolistic firms are close substitutes to one other. Each seller has some degree of monopoly power of ‘Making’ the price. Since there are many close substitutes available, the result is downward / negative sloping and elastic demand curve. This means that as price decreases, the quantity demanded for that good increases.,



Monopolistic Competition: As you can see from this chart, the demand curve (marked in red) slopes downward, signifying elastic demand.

Question 10: What is the reason for the long run equilibrium of a firm in monopolistic competition to be associated with zero profit?

Solution : The long run time horizon is featured by the free entry and exit of firms. If the firms in the short run are earning abnormal or super normal profits, then, new firms will be attracted to enter the market. Due to the new entrants, the market supply will increase. It leads to the reduction in the price that ultimately falls sufficiently to become equal to the minimum of average cost. When the market price is equal to the minimum of AC, it implies that all the firms earn normal profit or zero economic profit. Or we can say that this phenomenon of entry of firms, expansion of output and falling in price will continue till profit becomes zero.

On the contrary, if in the short run the firms are earning abnormal losses, then the existing firms will stop production and exit the market. This will lead to a decrease in the market supply, which will ultimately raise the price. The price will continue to rise until it becomes equal to the minimum of AC. 'Price = AC' implies that in the long run all the firms will earn zero economic profit.

Hence, when the price is equal to the minimum of AC, neither any existing firm will exit nor any new firm will enter the market and this would serve as the long run equilibrium.

Question 11: List the three different ways in which oligopoly firms may behave.

Solution : Oligopoly in a community market occurs when there are small numbers of firm producing a homogenous commodity.

Oligopoly firms may behave in the following three ways:

- i) Cartel - In order to avoid undue competition, oligopolistic firms may engage in formal agreements or contracts. This will not only allow them to maximise their total profits together, but also capture a significant market portion.
- ii) Barrier to the entry and exit of new firms - It may happen that existing firms try to adopt competitive price which restricts the entry of new firms into oligopoly market. Every producer believes in sales maximisation policy instead of profit maximisation while determining prices.
- iii) Advertisement and differentiated product - It may happen that the firms realise that price competition will leave them nowhere and consequently they emphasise more on advertising their products. It will enable them to capture the minds of consumers and indirectly increase their market portion.

Examples:

1. Operating systems for smartphones and computers provide excellent examples of oligopolies. Apple iOS and Google Android dominate smartphone operating systems, while computer operating systems are overshadowed by Apple and Windows. (which is again example of Duopoly.)
2. The music entertainment industry is dominated by Universal Music Group, Sony, BMG, Warner and EMI Group.

Question 12: If duopoly behaviour is one that is described by Cournot, the market demand curve is given by the equation $Q = 200 - 4P$

and both the firms have zero costs, find the quantity supplied by each firm in equilibrium and the equilibrium market price. Solution : Market demand curve

$$Q = 200 - 4P$$

When the demand curve is a straight line and total cost is zero, the duopolistic finds it most profitable to supply half of the maximum demand of a good.

At $P = \text{Rs } 0$, market demand is $Q =$

$$200 - 4(0) = 200 \text{ units}$$



If firm B does not produce anything, then the market demand faced by firm A is 200 units.

Therefore, The supply of firm A = $\frac{1}{2} \times 200 = 100$ units

In the next round, the portion of market demand faced by firm B is $200 - \frac{200}{2} = 200 - 100$

= 100 units

Therefore, Firm B would supply $\frac{1}{2} \times \left(200 - \frac{200}{2} \right) = 50$ units

Thus, firm B has changed its supply from zero to 50 units. To this firm A would react accordingly and the

demand faced by firm A will be $200 - \frac{1}{2} \times \left(200 - \frac{200}{2} \right)$

= $200 - 50 = 150$ units

Therefore, Firm A would supply = $\frac{150}{2} = 75$ units

The quantity supplied by firm A and firm B is represented in the table below.

Round	Firm	Quantity Supplied
1	B	0
2	A	$\frac{1}{2} \times 200 = \frac{200}{2} = 100$
3	B	$\frac{1}{2} \times \left(200 - \frac{1}{2} \times 200 \right) = \frac{200}{2} - \frac{200}{4}$

4	A	$\frac{1}{2} \times \left[200 - \frac{1}{2} \left(200 - \frac{1}{2} \times 200 \right) \right] = \frac{200}{2} - \frac{200}{4} + \frac{200}{8}$
5	B	$\frac{1}{2} \left\{ 200 - \frac{1}{2} \left[200 - \frac{1}{2} \left(200 - \frac{1}{2} \times 200 \right) \right] \right\} = \frac{200}{2} - \frac{200}{4} + \frac{200}{8} - \frac{200}{16}$

Therefore, the equilibrium output supplied by firm A

$$= \frac{200}{2} - \frac{200}{4} + \frac{200}{8} - \frac{200}{16} + \frac{200}{32} + \frac{200}{64} + \frac{200}{128} + \frac{200}{256} + = \frac{200}{3} units$$

Similarly,theequilibriumoutputsuppliedbyfirmB= $\frac{200}{3}$ units.

$$\text{Market Supply} = \text{Supply by firm A} + \text{Supply by firm B} = \frac{200}{3} + \frac{200}{3}$$

$$\text{Equilibrium output or Market Supply} = Q = \frac{400}{3} \text{ units}(1)$$

For equilibrium price

$$Q = 200 - 4p$$

$$= 200 - Q$$

$$p = 50 - \frac{Q}{4}$$

$$p = 50 - \frac{1}{4} \left(\frac{400}{3} \right) [\text{from}(1)]$$

$$p = 50 - \frac{100}{3}$$

$$p = \frac{150 - 100}{3}$$

$$p = \text{Rs } \frac{50}{3}$$

Therefore, the equilibrium output (total) is $\frac{400}{3}$ units and equilibrium price is $\text{Rs } \frac{50}{3}$.

Question 13: What is meant by prices being rigid? How can oligopoly behaviour lead to such an outcome?

Solution : Price rigidity implies that the price is unresponsive to the changes in demand and cost in the industry. Oligopoly behaviour leads to such rigid / constant / sticky prices. Every firm in an oligopoly market is faced with a Kinked Demand Curve, the kink being at that point on the demand curve which corresponds to the prevailing common price accepted by all the firms at which they sell their output. This is because of the fact that even if any firm raises the price of its product with the motive of earning higher profits, the other firm will not do so, and the first firm will lose its customers.

On the other hand, if one firm lowers its price in order to earn higher profits by maximising its sales, then in response, the other firm may also reduce the price. Consequently, the increase in total market sales is shared by both the firms. The firm that initiated selling at a lower price may get a lower share of the increase than expected.

Therefore, the firms do not change their prices due to the fear of rival's reaction. They are guided by long term objectives and do not want to change the prevailing price. Hence, there is no incentive for any firm to change its price. That is why the prices are regarded as rigid prices or sticky prices.

